

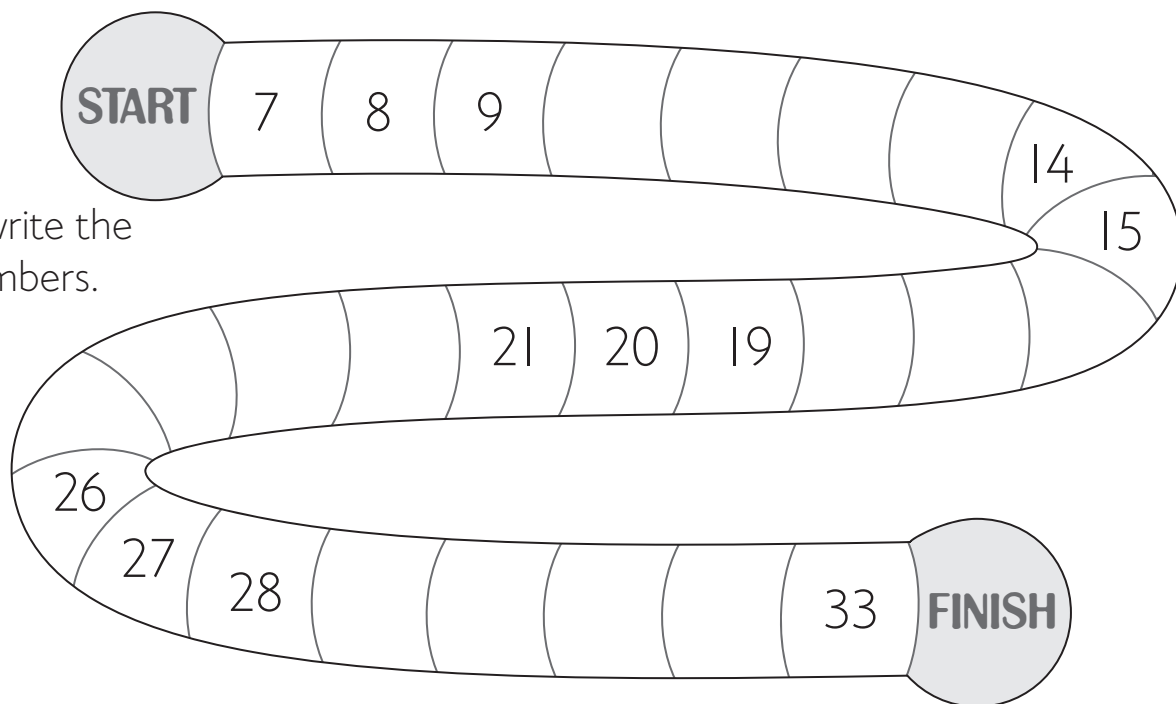


NA1 Count in ones

1 Write in the missing numbers.

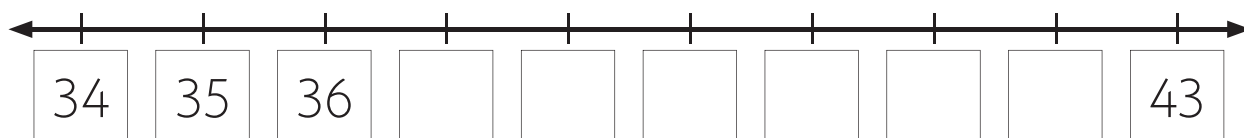
1	2	3			6			9	10
11			14	15		17	18		20
	22		24				28	29	
	32	33			36		38		40
41	42			45				49	

2 Count on around the track and write the missing numbers.



3 Count on and write the missing numbers.

17	18	19								27
----	----	----	--	--	--	--	--	--	--	----





NA1 Count in ones


1 Write the missing numbers.

1	2	3			6	7		9	10
11	12			15	16		18		20
21		23		25		27	28	29	
		33	34			37		39	
	42		44		46		48		50
	52			55	56				60
61		63			66		68	69	
71		73		75		77		79	80
	82		84	85		87		89	
91	92				96		98		100

2 Count one less and one more.

one less		one more
	17	
	33	
	50	
	29	
	92	
	75	

3 Count on and write the missing numbers.



4 Count back and write the missing numbers.

START

56

55

53

50

48

47

45

42

39

38

36

FINISH



NA1 Count in ones

1 Use the clues to fill in the missing numbers in each piece of a hundred board.

27		
	48	

		40
	59	

		25		27

	18		
			30

	74			
				98

	5	
		16

		23	
		53	

2 Solve the puzzle number board. Use the number clues to work out the missing numbers.

	2					9	
11							20
		23				27	
			34				38
				45			
					56		
		63					68
			74			77	
81						89	
	92						100