

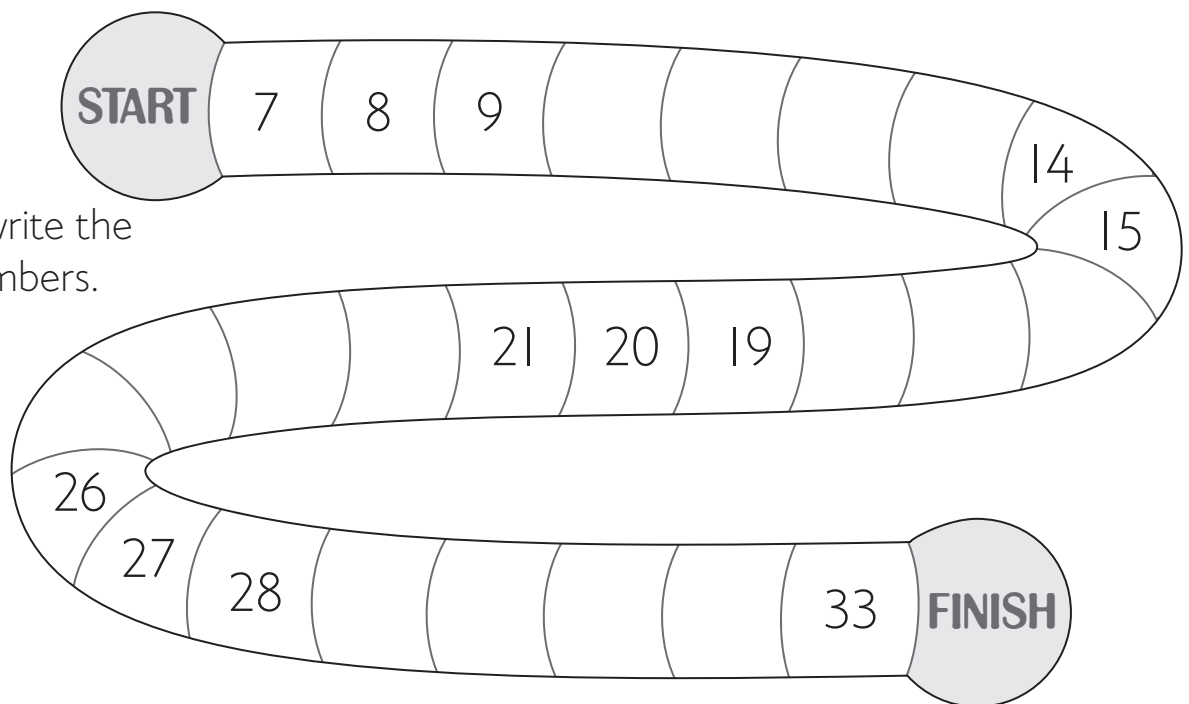


NA1 Count in ones

1 Write in the missing numbers.

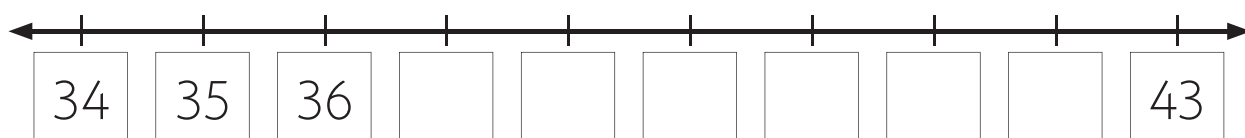
1	2	3			6			9	10
11			14	15		17	18		20
	22		24				28	29	
	32	33			36		38		40
41	42			45				49	

2 Count on around the track and write the missing numbers.



3 Count on and write the missing numbers.

17	18	19								27
----	----	----	--	--	--	--	--	--	--	----





NA1 Count in ones


1 Write the missing numbers.

1	2	3			6	7		9	10
11	12			15	16		18		20
21		23		25		27	28	29	
		33	34			37		39	
	42		44		46		48		50
	52			55	56				60
61		63			66		68	69	
71		73		75		77		79	80
	82		84	85		87		89	
91	92				96		98		100

2 Count one less and one more.

one less		one more
	17	
	33	
	50	
	29	
	92	
	75	

3 Count on and write the missing numbers.



4 Count back and write the missing numbers.

START

56

55

53

50

48

47

45

42

39

38

36

FINISH



NA1 Count in ones

1 Use the clues to fill in the missing numbers in each piece of a hundred board.

27		
	48	

		40
	59	

		25		27

	18		
			30

	74			
				98

	5	
		16

		23	
		53	

2 Solve the puzzle number board. Use the number clues to work out the missing numbers.

	2					9	
11							20
		23				27	
			34				38
				45			
					56		
		63					68
			74			77	
81						89	
	92						100

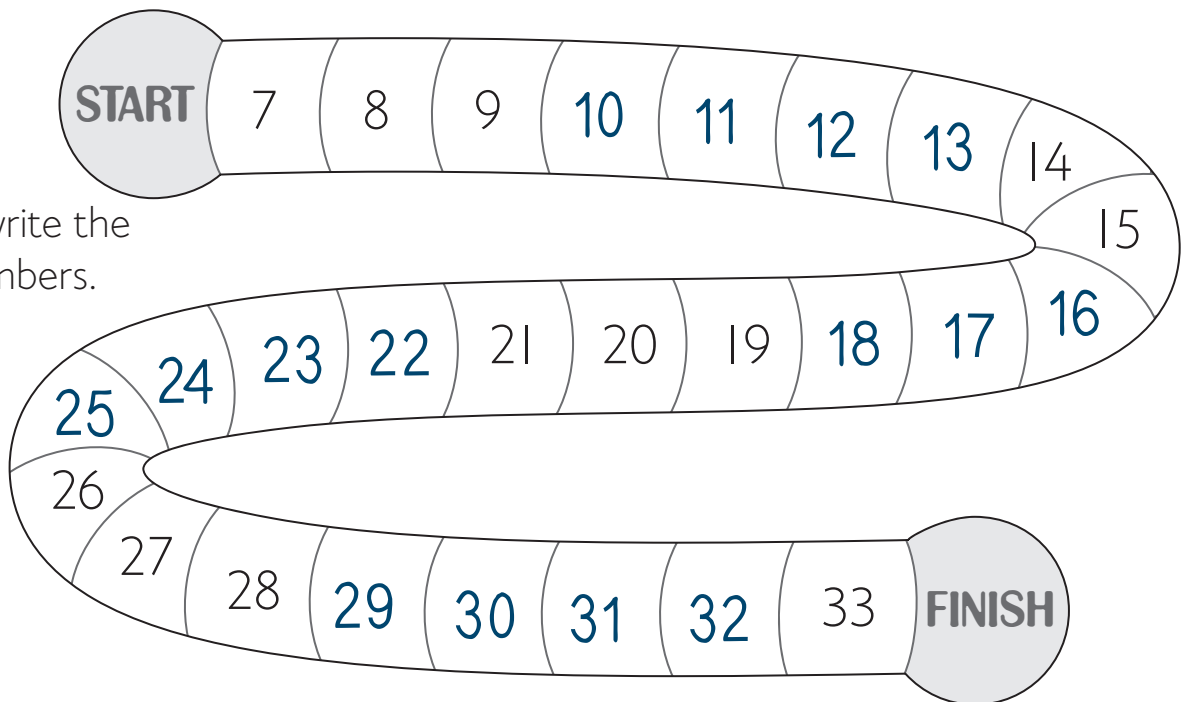


NA1 Count in ones

1 Write in the missing numbers.


1	2	3	4	5	6	7	8	9	10
11	12	13	14	15	16	17	18	19	20
21	22	23	24	25	26	27	28	29	30
31	32	33	34	35	36	37	38	39	40
41	42	43	44	45	46	47	48	49	50

2 Count on around the track and write the missing numbers.



3 Count on and write the missing numbers.

17	18	19	20	21	22	23	24	25	26	27
----	----	----	----	----	----	----	----	----	----	----





NA1 Count in ones

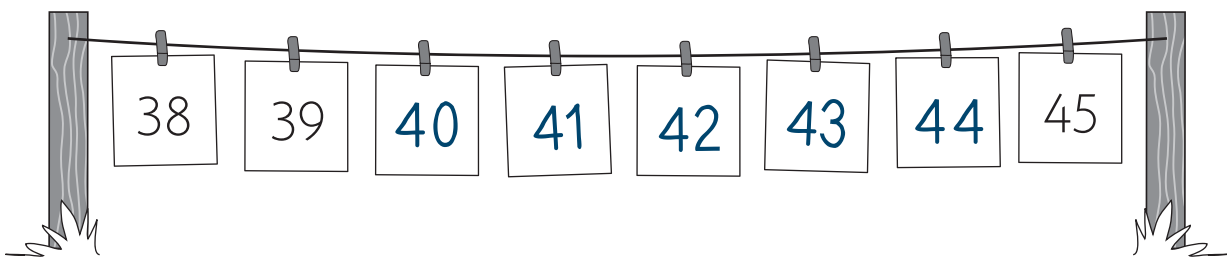
1 Write the missing numbers.

1	2	3	4	5	6	7	8	9	10
11	12	13	14	15	16	17	18	19	20
21	22	23	24	25	26	27	28	29	30
31	32	33	34	35	36	37	38	39	40
41	42	43	44	45	46	47	48	49	50
51	52	53	54	55	56	57	58	59	60
61	62	63	64	65	66	67	68	69	70
71	72	73	74	75	76	77	78	79	80
81	82	83	84	85	86	87	88	89	90
91	92	93	94	95	96	97	98	99	100

2 Count one less and one more.

one less		one more
16	17	18
32	33	34
49	50	51
28	29	30
91	92	93
74	75	76

3 Count on and write the missing numbers.



4 Count back and write the missing numbers.

START

56
55
54
53

				46	45	44	43	42	
				47				41	
								40	
	52	51	50	49	48				

FINISH

34
35
36



NA1 Count in ones

1 Use the clues to fill in the missing numbers in each piece of a hundred board.

27	28	29
37	38	39
47	48	49

38	39	40
		50
58	59	60

23	24	25	26	27
		35		
		45		

			10
17	18	19	20
			30

73	74	75	76	77	78
83					88
93					98

4	5	6	
		16	
	26	27	28

		23		
		33		
		43		
51	52	53	54	55
		63		
		73		
		83		

2 Solve the puzzle number board. Use the number clues to work out the missing numbers.

1	2					9	10
11	12					19	20
		23	24			27	28
		33	34			37	38
				45	46		
				55	56		
		63	64			67	68
		73	74			77	78
81	82					89	90
91	92					99	100